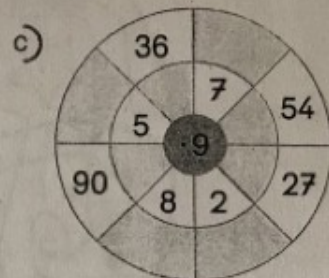
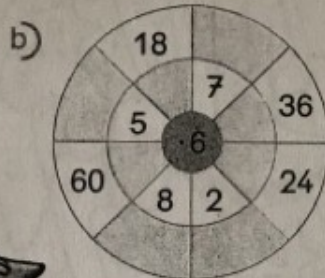
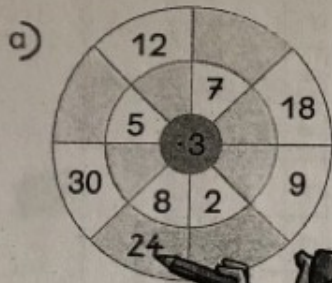




1 Ergänze die Rechenräder und Rechentabellen.



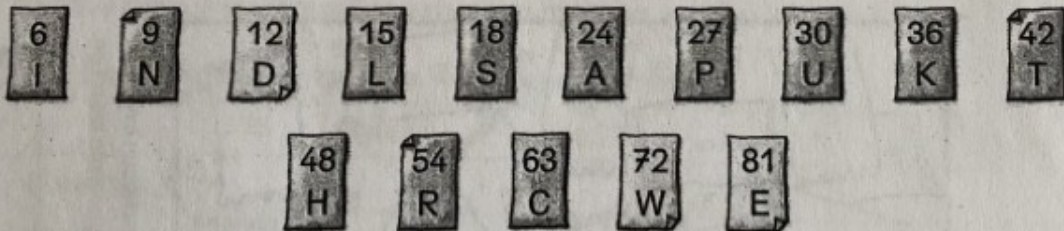
d)

·	3	6	9
5		30	
			72
2			
	30		
		24	

e)

·	3	6	9
3			27
		42	
	3		
9			
		36	

2 Löse die Geheimschrift.



2·6	8·3	2·9	6·6	4·6	3·3	1·9	3·6	7·6
D	___	___	___	___	___	___	___	___

4·3	10·3	8·9	1·6	9·6	4·9	5·3	2·3	7·9	8·6
___	___	___	___	___	___	___	___	___	___

6·3	5·6	9·3	9·9	6·9	!
___	___	___	___	___	!